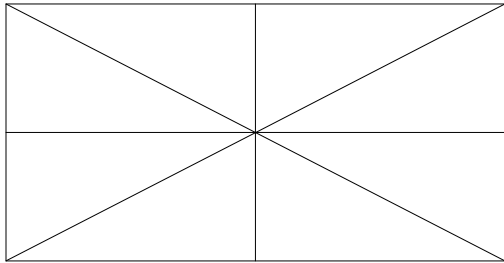


Agrupamento de Escolas Ordem de Sant'Iago
Escola Básica e Secundária Ordem de Sant'Iago

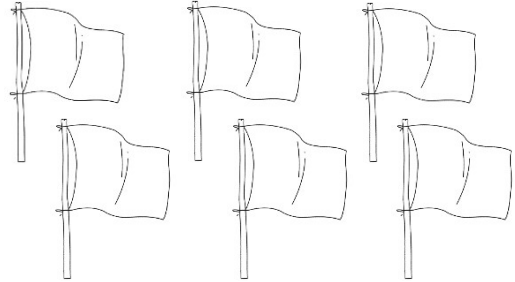
Ficha de Trabalho de Matemática -5ºAno

Nome: _____ Nº: _____ Turma: _____ Data: ___/___/___

1 – Pinta em cada figura, a parte que corresponde à fração indicada.



$\frac{5}{8}$



$\frac{1}{2}$

2 – Escreve a leitura das seguintes frações:

$\frac{1}{2}$ _____

$\frac{1}{5}$ _____

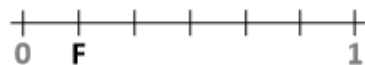
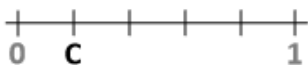
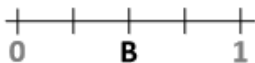
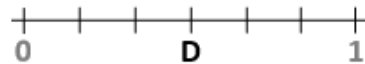
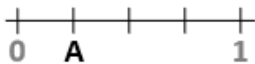
$\frac{1}{3}$ _____

$\frac{1}{10}$ _____

$\frac{1}{4}$ _____

$\frac{1}{100}$ _____

3 – Cada um dos segmentos de reta seguintes possui um ponto identificado por uma letra. Escreve, em cada caso, a fração que lhe corresponde.



A

B

C

D

E

F

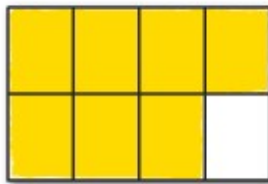
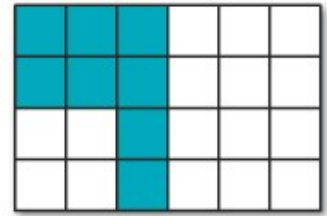


Recordar fração:

Agrupamento de Escolas Ordem de Sant'Iago
Escola Básica e Secundária Ordem de Sant'Iago

Ficha de Trabalho de Matemática -5ºAno

Nome: _____ Nº: _____ Turma: _____ Data: ___/___/___

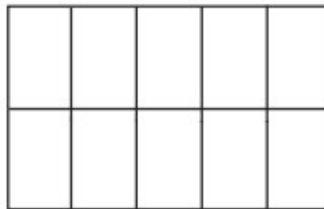
1 – Completa a fração que representa cada parte colorida.



2 – Pinta em cada figura, a parte que corresponde à fração indicada.



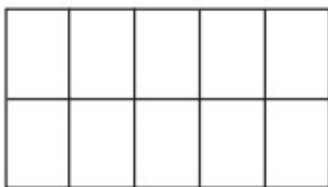
$$\frac{4}{10}$$



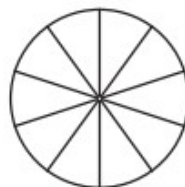
$$\frac{8}{10}$$



$$\frac{3}{10}$$

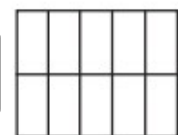


$$\frac{7}{10}$$



$$\frac{6}{10}$$

$$\frac{9}{10}$$

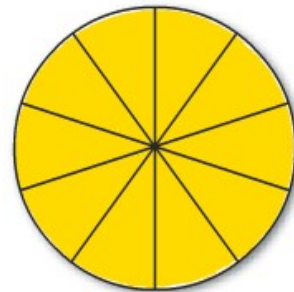
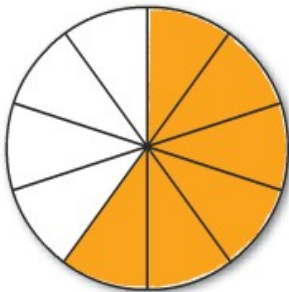
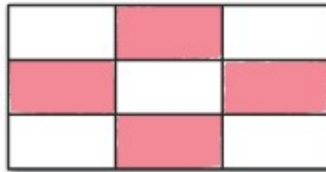


Agrupamento de Escolas Ordem de Sant'Iago
Escola Básica e Secundária Ordem de Sant'Iago

Ficha de Trabalho de Matemática - 5º Ano

Nome: _____ Nº: _____ Turma: _____ Data: ___/___/___



1 Completa a fração que representa cada parte colorida.



2 – Pinta de acordo com as indicações:

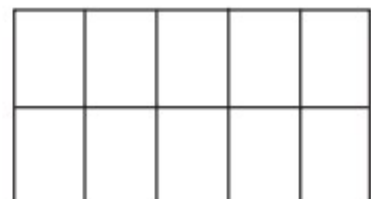
$\frac{4}{5}$

de cada figura.



$\frac{8}{10}$

de cada figura.

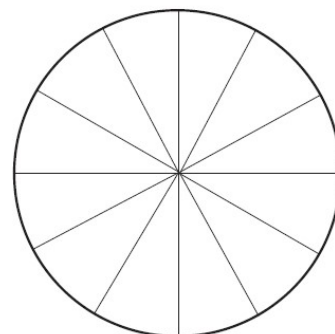
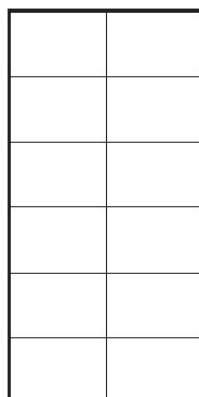
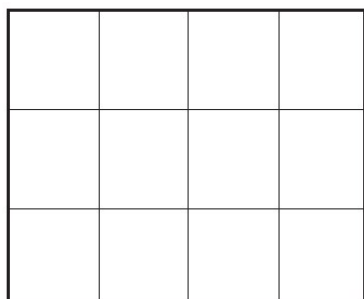
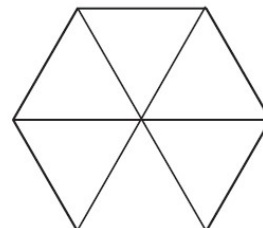
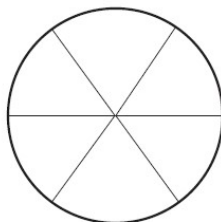
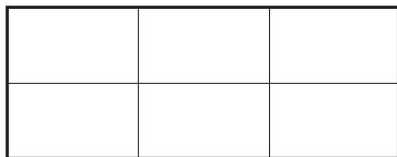


Agrupamento de Escolas Ordem de Sant'Iago
Escola Básica e Secundária Ordem de Sant'Iago

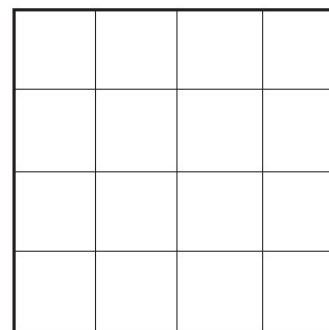

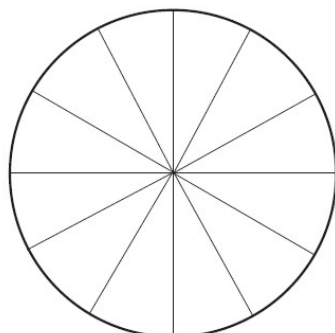
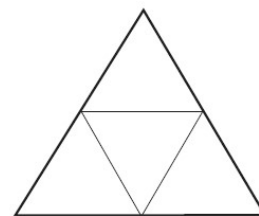
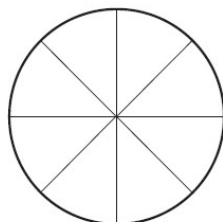

Ficha de Trabalho de Matemática - 5º Ano

Nome: _____ Nº: _____ Turma: _____ Data: ___/___/___

1 – Pinta $\frac{2}{3}$ de cada figura.



2 – Pinta $\frac{3}{4}$ de cada figura.

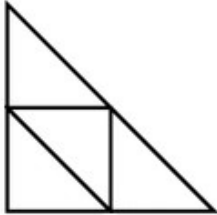


Agrupamento de Escolas Ordem de Sant'Iago
Escola Básica e Secundária Ordem de Sant'Iago


Ficha de Trabalho de Matemática -5ºAno

Nome: _____ Nº: _____ Turma: _____ Data: ___/___/___

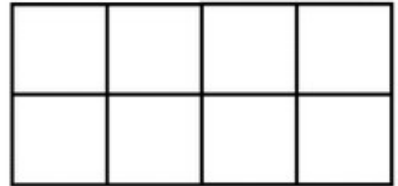
1 – Pinta:



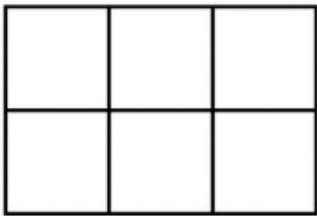
$\frac{1}{2}$




$\frac{4}{7}$



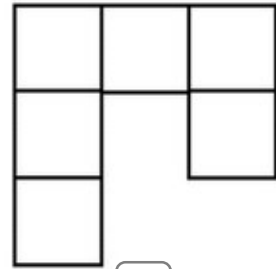
$\frac{1}{4}$



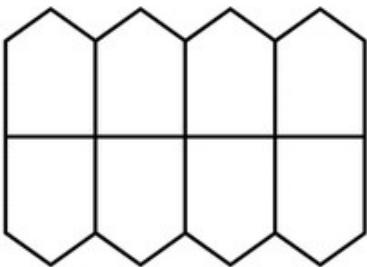
$\frac{1}{3}$



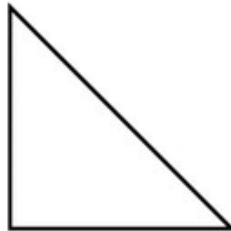
$\frac{2}{3}$



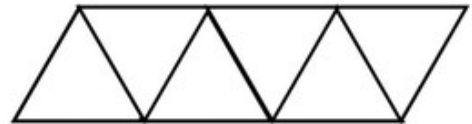
$\frac{1}{2}$



$\frac{3}{4}$

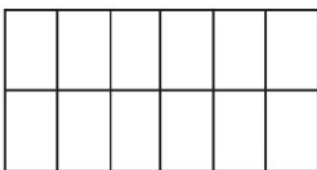


$\frac{1}{2}$

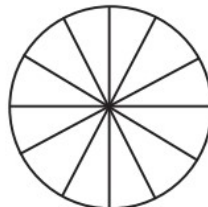


$\frac{2}{3}$

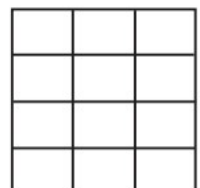
$\frac{1}{2}$



$\frac{3}{6}$



$\frac{7}{10}$

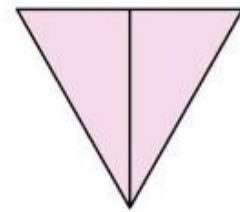
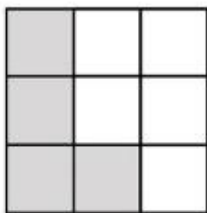
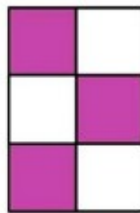



Agrupamento de Escolas Ordem de Sant'Iago
Escola Básica e Secundária Ordem de Sant'Iago

Ficha de Trabalho de Matemática - 5º Ano

Nome: _____ Nº: _____ Turma: _____ Data: ___/___/___

1 – Completa a fração que representa cada parte colorida.

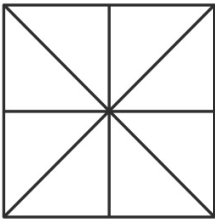


Agrupamento de Escolas Ordem de Sant'Iago
Escola Básica e Secundária Ordem de Sant'Iago


Ficha de Trabalho de Matemática -5ºAno

Nome: _____ Nº: _____ Turma: _____ Data: ___/___/___


1 – Tomando por unidade o quadrado pinta em cada figura o correspondente à fração indicada.



$\frac{3}{8}$

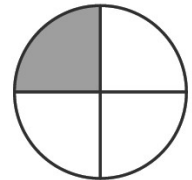

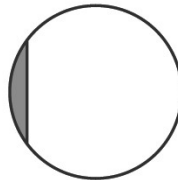
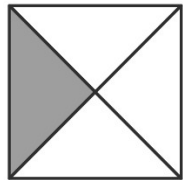


$\frac{2}{3}$

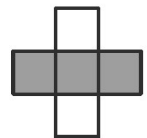
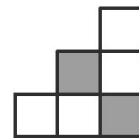


$\frac{1}{4}$

2 – Em que figuras estão pintados $\frac{1}{4}$ da figura? Assinala com X.



3 – Sabendo que cada figura representa a unidade e que está dividida em partes iguais que fração representa a parte pintada?



4 – Desenha e pinta figuras que representem as frações seguintes:

$\frac{2}{4}$

$\frac{6}{10}$

$\frac{3}{9}$