

Vamos recordar 1...

Nome: _____ Data: _____

1. Completa o quadro de acordo com o exemplo.

C	D	U		
1	0	6	$100 + 0 + 6$	Cento e seis
1	1	4	$100 + ___ + ___$	
4	2	0		
5	4	5		
9	9	9		

2. Preenche a tabela.

x	1	2	3	4	5	6	7	8	9	10
2										
3										
4										
5										
6										
10										

3. Efetua os cálculos seguintes:

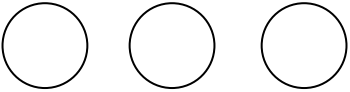
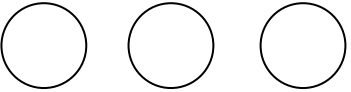
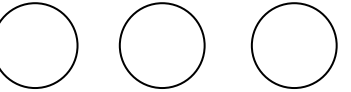

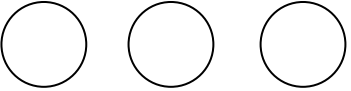
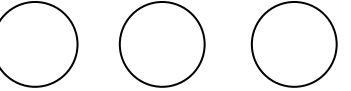
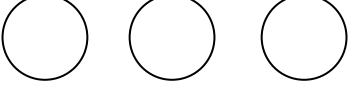
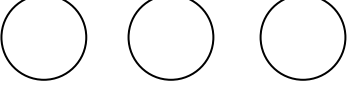




$$123 + 348 =$$

$$789 - 216 =$$

Vamos recordar 2...

Nome: _____ Data: _____

1. Pinta as quantidades indicadas.

Metade	A terça parte	A quarta parte
		
		
		
		

2. Na entrada da escola da Rita há um painel de azulejos de forma retangular feito pelos alunos. A Rita contou 4 filas de 6 azulejos cada uma. Quantos azulejos tem o painel?

R.: _____

3. Na sala de aula do Artur há uma embalagem com 4 dezenas de marcadores. A professora resolveu distribuí-los igualmente por 5 caixas. Quantos marcadores ficarão em cada caixa?

R.: _____