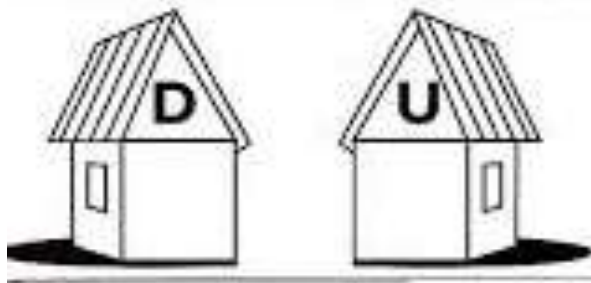
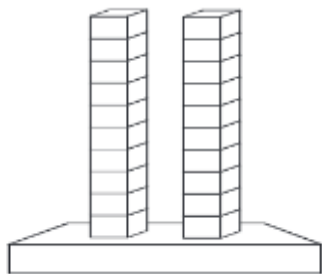


# 20

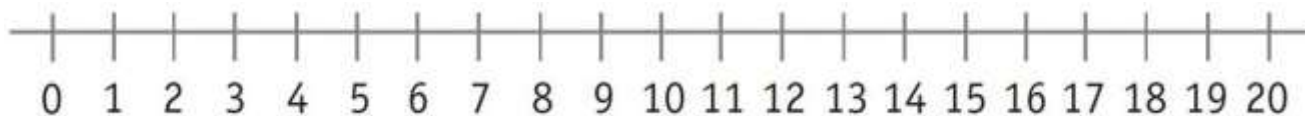


\_\_\_\_\_ vinte \_\_\_\_\_ \_\_\_\_\_ dezena + \_\_\_\_\_ unidades = 20

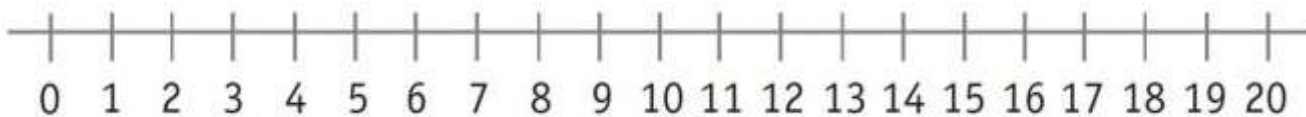
Escreve os números de 0 a 20.

0 - \_\_\_\_\_  
\_\_\_\_\_

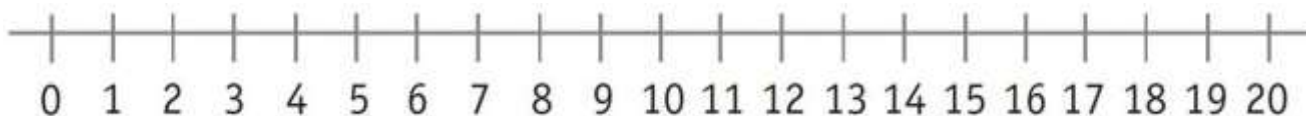
Resolve, utilizando a reta numérica:



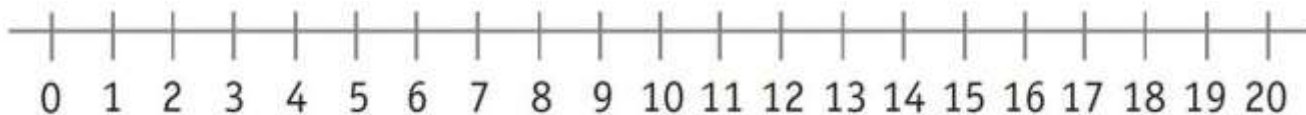
$13 + 2 = \underline{\hspace{2cm}}$



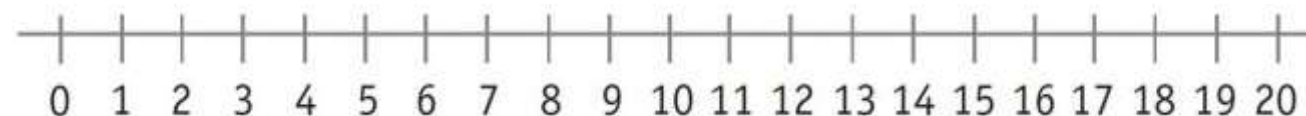
$10 + 5 = \underline{\hspace{2cm}}$



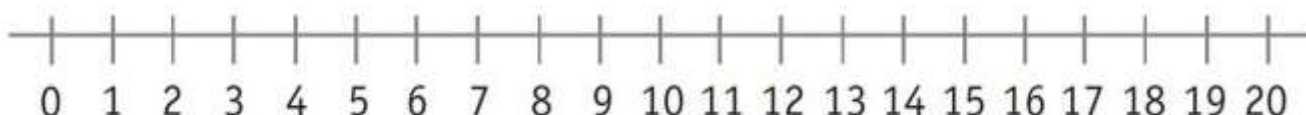
$17 + 2 = \underline{\hspace{2cm}}$



$11 - 5 = \underline{\hspace{2cm}}$



$14 - 6 = \underline{\hspace{2cm}}$



$20 - 5 = \underline{\hspace{2cm}}$