



Pinta, nas molduras do dez, as quantidades indicadas.



10



4

14

- Escreve o número 14:

14 — 14 — _____

Quatorze _____

Completa:

0		2				6				10			
---	--	---	--	--	--	---	--	--	--	----	--	--	--

14							7						1
----	--	--	--	--	--	--	---	--	--	--	--	--	---

Calcula:

$10 + 2 + 2 = \underline{\quad}$

$4 + 10 = \underline{\quad}$


$11 + 3 = \underline{\quad}$

$9 + 5 = \underline{\quad}$

$10 + 4 = \underline{\quad}$

$12 + 2 = \underline{\quad}$

Decompõe:



Pinta 1 dezena e 4 unidades.

D	U

