



Pinta, nas molduras do dez, as quantidades indicadas.



10



3

**13**


1 dezena + 3 unidades

Pinta uma dezena e três unidades no fio de contas .

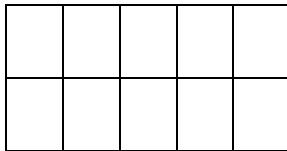
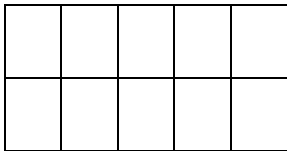


13 -13 -

treze \_\_\_\_\_



Pinta, nas molduras do dez, as quantidades indicadas.



**13**

10

3

1 dezena + 3 unidades

Pinta uma dezena e três unidades no fio de contas .



13 -13 -

treze \_\_\_\_\_



Nome: \_\_\_\_\_ Data: \_\_\_\_/\_\_\_\_/\_\_\_\_

- Escreve o número 13:

13 — 13 — \_\_\_\_\_  
treze \_\_\_\_\_

Completa:

0		2				6				10			
---	--	---	--	--	--	---	--	--	--	----	--	--	--


13						7						1	
----	--	--	--	--	--	---	--	--	--	--	--	---	--

Calcula:

$10 + 2 + 1 = \underline{\quad}$        $3 + 10 = \underline{\quad}$        $11 + 2 = \underline{\quad}$

$9 + 4 = \underline{\quad}$        $10 + 3 = \underline{\quad}$        $12 + 1 = \underline{\quad}$

Decompõe:



Pinta 1 dezena e 3 unidades.

D	U

